



Year 1

Week 3 Activities

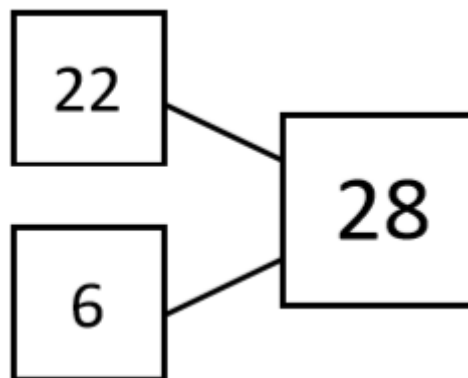
Day 1 Lesson 1: Maths

Addition and subtraction.

Transfer these part-part whole models into addition and subtraction equations.

Tips:

- In an addition equations the answer is **always the whole.**
- In a subtraction equation the whole **always needs to go first.**

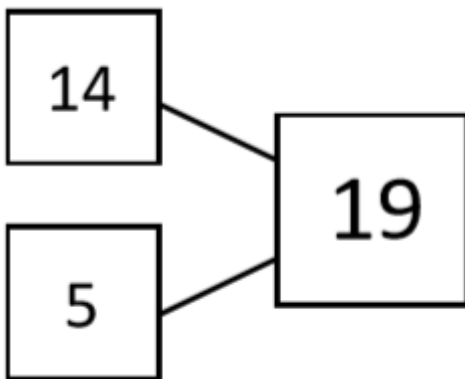
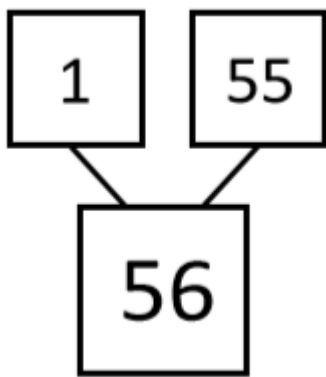
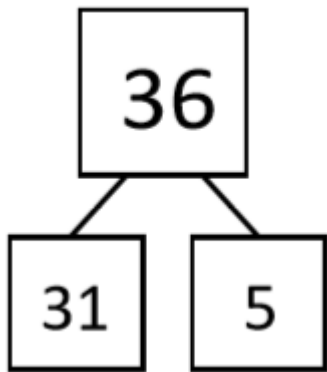


$$22 + 6 = 28 \quad \text{OR} \quad 6 + 22 = 28$$

$$28 - 22 = 6 \quad \text{OR} \quad 28 - 6 = 22$$

Day 1 Lesson 1: Maths

Now it is your turn.



Day 1 Lesson 2: English

Zid's Diary

Imagine that you are Zid. Write a diary entry about your week. What did you do each day? How did you feel? Remember to use the word 'I' in your sentences.

idea	work
plan	improve
dress	decorations
make	special
friends	good
help	better
try	best
change	party



Monday:

Day 1 Lesson 3: Phonics (u-e Huge Brute)

Circle the words that include the sound 'u-e'.

Shoe

Cube

Useful

Tube

Room

Soon

June

Now, write a sentence that that includes a word that has the 'u-e'.

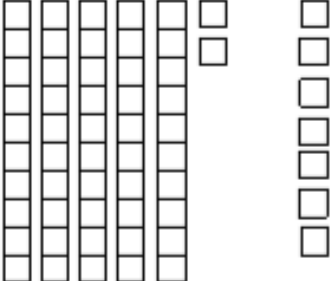
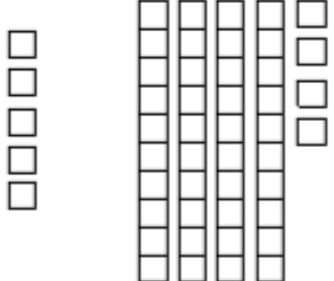
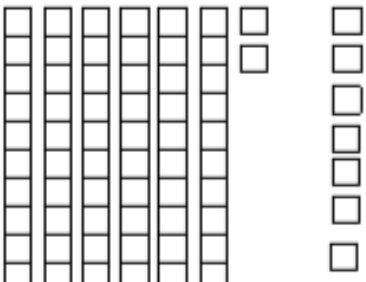
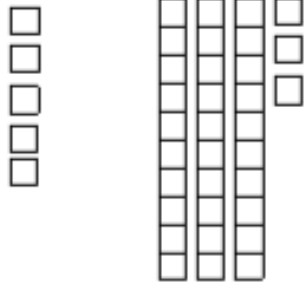
Extension: Can you write a sentence that includes two words with the 'u-e' sound?

What other special friend sounds the same as 'u-e Huge Brute' but is spelt differently?

Day 2 Lesson 1: Maths

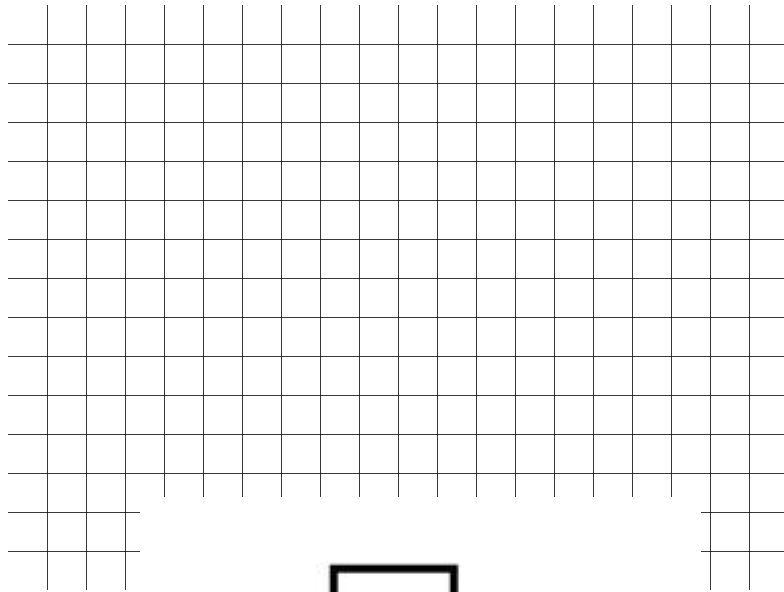
Addition and subtraction.

Use the cubes to help you work out the addition equations. Remember to count them carefully!

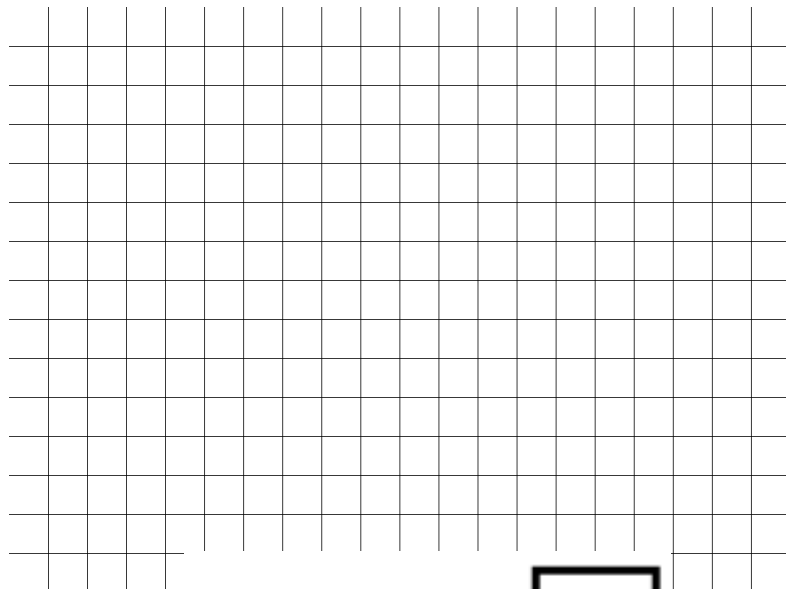
 $52 + 7 = \square$	 $\square = 5 + 44$
 $62 + 7 = \square$	 $5 + 33 = \square$

Day 2 lesson 1: Maths

Extension: work these equations out by representing the numbers with draw out cubes.



$$36 = \square + 33$$



$$24 + 4 = \square$$

Day 3 Lesson 1: Maths

Complete the equations using the number line.



Number Line Subtraction

Example:






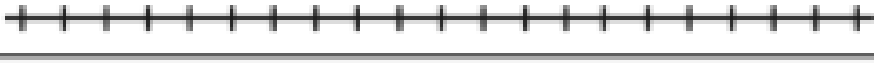




$10 - 5 = 5$	
--------------	--

$20 - 3 =$	
$9 - 4 =$	
$18 - 2 =$	
$10 - 6 =$	
$7 - 3 =$	
$2 - 2 =$	
$3 - 1 =$	
$11 - 8 =$	
$15 - 3 =$	

Day 3 lesson 2: Maths



Number Line Subtraction

$20 - 17 =$	
$12 - 4 =$	
$18 - 12 =$	
$10 - 3 =$	
$17 - 5 =$	
$12 - 2 =$	
$3 - 2 =$	
$20 - 8 =$	
$15 - 3 =$	
$19 - 11 =$	

Day 3 Lesson 2: English

Diary entry

Wednesday:

Draw a picture of what you did today:

Day 3 Lesson 3: Phonics (aw- Yawn at Dawn)

Circle the words that include the sound 'aw'.

Sure

Saw

Tube

More

Lawn

June

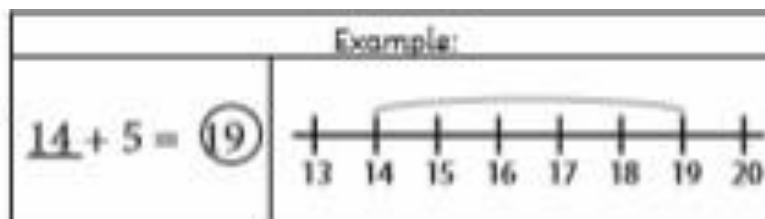
Now, write a sentence that includes a word that has the 'aw'.

Extension: Can you write a sentence that includes two words with the 'aw' sound?

What other special friend sounds the same as 'aw Yawn at Dawn' but is spelt differently?

Day 4 Lesson 1: Maths

Addition to 20 with a number line



$10 + 7 =$



$10 + 5 =$



$11 + 2 =$



$6 + 8 =$



$9 + 9 =$



$8 + 10 =$



$5 + 12 =$



$17 + 3 =$



Day 4 Lesson 3: Handwriting

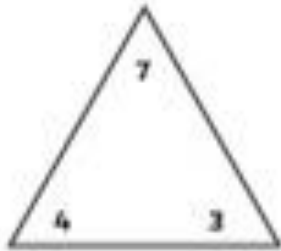
First, write two lines of the letter. Next, write two lines of a word that begins with the letter. Finally, write two sentences that include a word that begins with the letter.

a a a _____

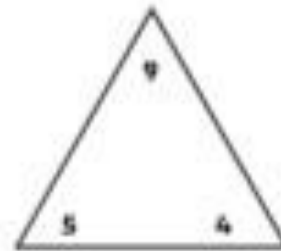
Day 5 Lesson 1: Maths

Addition and Subtraction Fact Families to 10

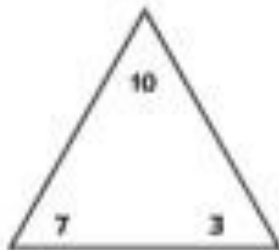
For each set of numbers, write four different addition and subtraction facts.



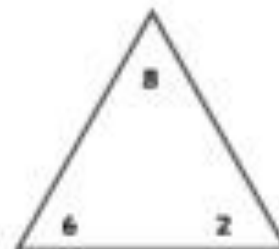
$$\begin{array}{r} \square + \square = \square \\ \square + \square = \square \\ \square - \square = \square \\ \square - \square = \square \end{array}$$



$$\begin{array}{r} \square + \square = \square \\ \square + \square = \square \\ \square - \square = \square \\ \square - \square = \square \end{array}$$



$$\begin{array}{r} \square + \square = \square \\ \square + \square = \square \\ \square - \square = \square \\ \square - \square = \square \end{array}$$



$$\begin{array}{r} \square + \square = \square \\ \square + \square = \square \\ \square - \square = \square \\ \square - \square = \square \end{array}$$

Day 5 Lesson 3: Phonics (are-Share and Care)

Circle the words that include the sound 'are'.

Share

Fair

Scare

Hair

Soon

There

Now, write a sentence that that includes a word that has the 'are'.

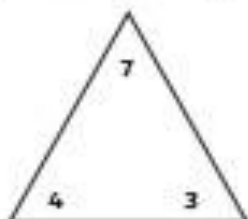
Extension: Can you write a sentence that includes two words with the 'are' sound?

What other special friend sounds the same as 'are- Care and Share' but is spelt differently?

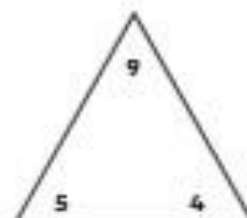
Answers

Addition and Subtraction Fact Families to 10 Answers

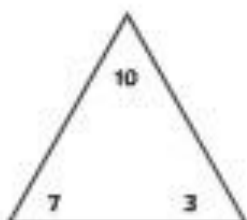
For each set of numbers, write four different addition and subtraction facts.



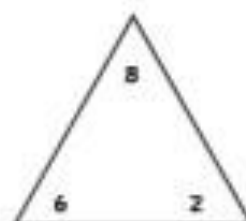
$$\begin{array}{r} \boxed{4} + \boxed{3} = \boxed{7} \\ \boxed{3} + \boxed{4} = \boxed{7} \\ \boxed{7} - \boxed{4} = \boxed{3} \\ \boxed{7} - \boxed{3} = \boxed{4} \end{array}$$



$$\begin{array}{r} \boxed{5} + \boxed{4} = \boxed{9} \\ \boxed{4} + \boxed{5} = \boxed{9} \\ \boxed{9} - \boxed{4} = \boxed{5} \\ \boxed{9} - \boxed{5} = \boxed{4} \end{array}$$



$$\begin{array}{r} \boxed{7} + \boxed{3} = \boxed{10} \\ \boxed{3} + \boxed{7} = \boxed{10} \\ \boxed{10} - \boxed{7} = \boxed{3} \\ \boxed{10} - \boxed{3} = \boxed{7} \end{array}$$



$$\begin{array}{r} \boxed{6} + \boxed{2} = \boxed{8} \\ \boxed{2} + \boxed{6} = \boxed{8} \\ \boxed{8} - \boxed{6} = \boxed{2} \\ \boxed{8} - \boxed{2} = \boxed{6} \end{array}$$
